

Identify these figures:



Draw these figures:

Whole rest:

Half rest:

Quarter rest:

Eighth rest:

Do the math:

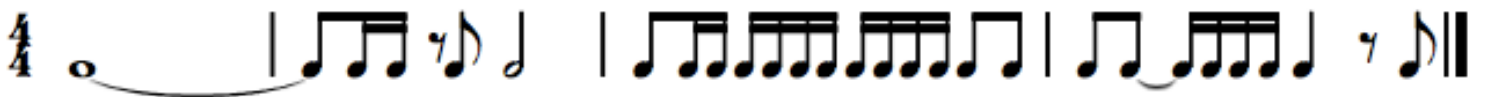
_____  = 

_____  = 

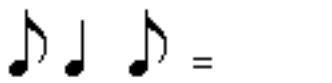
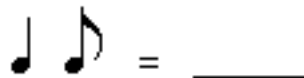
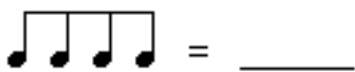
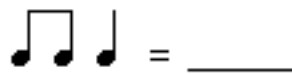
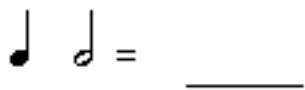
_____  = 

_____  = 

Write in the counting for this bugger.



Find one rest which will be the same duration as these combinations of notes.



Draw four measures of rhythm in 4/4 and four measures of rhythm in 6/8 in the space below. Include eighth notes, and at least one dotted note. Group the notes appropriately for the given time signature.